

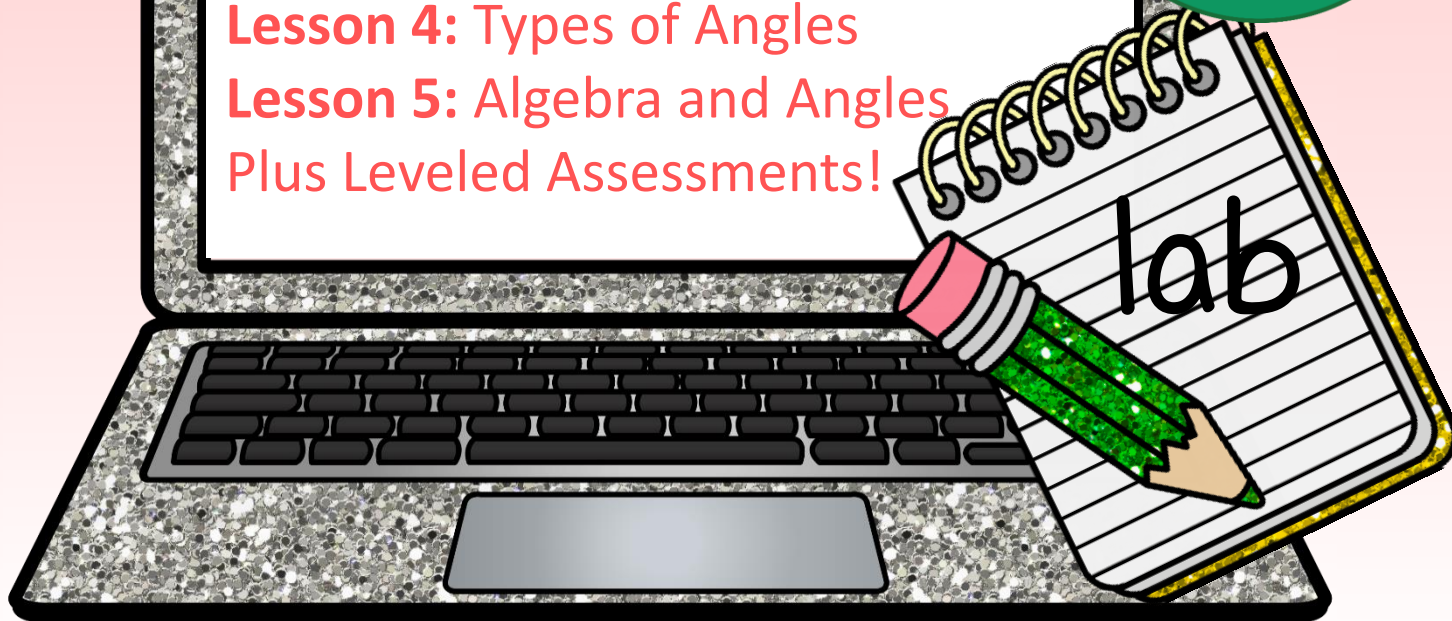
# Geometry Unit I

## Vocabulary, Tools & Intro to Proofs

# Bundle

**Digital Lessons with Paper & Pencil LABS**

**Lesson 1:** Undefined Terms  
**Lesson 2:** Geometric Vocabulary  
**Lesson 3 Lab\*:** Using Geometric Tools  
**Lesson 4:** Types of Angles  
**Lesson 5:** Algebra and Angles  
Plus Leveled Assessments!



# Unit 1: Geometric Vocabulary, Notation & Tools

**Lesson 1:** Undefined Terms & Learning to Draw  
Digitally

**Lesson 2:** Geometric Vocabulary

**Lesson 3 Lab\*:** Using Geometric Tools

**Lesson 4:** Angle Pair Relationships

**Lesson 5:** Algebra and Angles

## Unit Assessment:

2 Leveled Assessments aligned to Common Core

Answer Key

Scoring Rubric

# Leveled Assessments

## Unit 1 Assessment

### Common Core State Standards:

#### [CCSS.MATH.CONTENT.HSG.CO.A.1](#)

Know precise definitions of angle, circle, perpendicular line, parallel line, and line segment, based on the undefined notions of point, line, distance along a line, and distance around a circular arc.

#### [CCSS.MATH.CONTENT.HSG.CO.C.9](#)

Prove theorems about lines and angles. *Theorems include: vertical angles are congruent; when a transversal crosses parallel lines, alternate interior angles are congruent and corresponding angles are congruent; points on a perpendicular bisector of a line segment are exactly those equidistant from the segment's endpoints.*

#### [CCSS.MATH.CONTENT.HSG.CO.D.12](#)

Make formal geometric constructions with a variety of tools and methods (compass and straightedge, string, reflective devices, paper folding, dynamic geometric software, etc.). *Copying a segment; copying an angle; bisecting a segment; bisecting an angle; constructing perpendicular lines, including the perpendicular bisector of a line segment; and constructing a line parallel to a given line through a point not on the line.*

#### [CCSS.MATH.CONTENT.HSA.REI.A.1](#)

Explain each step in solving a simple equation as following from the equality of numbers asserted at the previous step, starting from the assumption that the original equation has a solution. Construct a viable argument to justify a solution method.

#### [CCSS.MATH.CONTENT.7.G.B.5](#)

Use facts about supplementary, complementary, vertical, and adjacent angles in a multi-step problem to write and solve simple equations for an unknown angle in a figure.



## Leveled Assessments

## Grading Rubrics

## Answer Key

## Aligned to Common Core

## Unit 1: Geometric Vocabulary, Tools & Intro to Proofs

**Lesson 1: Undefined Terms**

**Lesson 2: Geometry Vocabulary & Notation**

**Lesson 3 Lab\*: Using Geometric Tools**

**Lesson 4: Angle Pair Relationships**

**Lesson 5: Algebra and Angles**

LEVELED ASSESSMENTS: 14 EDITABLE PAGES



## Lesson 1: Undefined Terms: *learning to draw digitally*

- This activity starts by identifying the three undefined terms in Euclidean geometry along with sample ways to notate each figure. The lesson continues to teach students how to draw and label each term in the lesson by using the drawing tools in google slides to create them. The lesson ends with a brief formative self assessment.
- If you would prefer for your students to not have the answers as they work, then simply delete the answer slides before sharing the file with your students.
- Note: Lesson format is compatible with Google slides®
- 27 slides; 3 instructional pages
- Estimated Instructional Time: 45 minutes

[CCSS.MATH.CONTENT.HSG.CO.A.1](#)

## Lesson 2: Geometry Vocabulary: *learning to draw* *DIGITALLY*

- This resource defines essential geometry terms. Students then have the opportunity to practice drawing the figures in google slides. The lesson ends with a formative self assessment where students practice defining and classifying terms.
- If you would prefer for your students to not have the answers as they work, then simply delete the answer slides before sharing the file with your students.
- Note: Lesson format is compatible with Google slides®
- 31 slides; 4 instructional pages
- Estimated Instructional Time: 45 minutes

[CCSS.MATH.CONTENT.HSG.CO.A.1](#)

## Lesson 3: Using Geometric Tools: *digital lesson with Paper and Pencil Lab*

- **Materials needed**

compass; straightedge/ruler; string; mirror; paper/tracing paper; **printed paper and pencil lab handout.**

- If tracing paper is available, it may be easier for the paper folding activity. Or have students hold paper up to the light or a window.
- This lesson introduces using geometric tools. Students learn about the different types of geometric tools in google slides® and then practice using the tools by completing a paper and pencil lab. The lesson is differentiated by providing lots of choices for what to create.

[CCSS.MATH.CONTENT.HSG.CO.A.1](#)

[CCSS.MATH.CONTENT.HSG.CO.D.12](#)

Continued on next Page...

## Lesson 3: Continued...

- All geometric tools are practiced except for using geometric software.
- You can access a **free lesson** for using geometric software here:

Getting Started with  
Geogebra

- Tip: The paper and pencil lab may be set up in stations for students to rotate through.
- 22 slides + 3 pages instructions+ 8 printables+3answer key
- Estimated Instructional Time: 40 minutes

## Lesson 4: Angle Pair Relationships – Notes & INTRO to PROOF

- This reviews different angle pair relationships from grade 7 geometry:
  - Adjacent Angles
  - Complementary Angles
  - Supplementary Angles
  - Vertical Angles
  - Linear Pairs
- The lesson then continues to extend the vocabulary to key words for writing proofs, such as axiom, postulate, and theorem, followed by the angle addition postulate and segment addition postulate.
- Practice Digital Drawing with linear pairs and vertical angles
- Online exploration activities to discover that linear pairs form supplementary angles and that vertical angles have equal measure.

[CCSS.MATH.CONTENT.7.G.B.5](#)

[CCSS.MATH.CONTENT.HSG.CO.C.9](#)

Continued on next Page...



## Lesson 4: Continued...

- Students make conjectures based on the exploration followed by brainstorming how to prove their statement. Turn & talk to a neighbor to get the most brainstorming ideas.
- Students are walked through their very first set of proofs!
- The lesson ends with a quick formative self assessment recapping key aspects of the lesson.
- Practice exercises give students the opportunity to distinguish between statements and reasons, better preparing them to write proofs.
- Tip: use scrap paper or white boards for students to sketch figure on for processing or brainstorming.
- If you would not like your students to have the answers to grade as they go, simply delete those slides before sharing the file with your students.
  
- 43 slides + 4 pages instructions + 2 GeoGebra explorations
- Estimated Instructional Time: 45 minutes

## Lesson 5: Algebra and Angles – Getting Ready for Proofs

- Pre-requisite skills:
  - Definition of Supplementary Angles; Vertical angles have equal measure; linear pairs are supplementary.
- This lesson reviews solving algebraic equations from Algebra with a slight twist. Students are asked to justify each step for solving the equation with a property of equality.
- The lesson continues to introduce the reflexive, symmetric and transitive properties of equality.
- Finally, students combine their algebra and geometry skills to solve for unknown angle measures.
- The lesson ends with a quick self assessment followed by practice problems to solve for missing angle measures.
- Note: Lesson format is compatible with Google slides®
  
- If you would not like your students to have the answers to grade as they go, simply delete those slides before sharing the file with your students.
  
- 52 slides + 4 pages instructions
- Estimated Instructional Time: 90 minutes

[CCSS.MATH.CONTENT.HSA.REI.A.1](#)

# 1

# Lesson

## Undefined Geometric Terms:

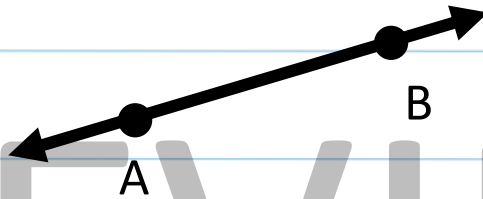
Euclidean Geometry has 3 undefined terms.

Point



Read as Point A


Line



Read as line AB

Notation:  $\overleftrightarrow{AB}$

Plane



Read as Plane M

# Geometry Vocabulary:

**Obtuse Angle:** an angle that measures between  $90^\circ - 180^\circ$



**Straight Angle:** an angle that measures  $180^\circ$



**Right Angle:** an angle that measures  $90^\circ$



The box symbol indicates a right angle.

**Reflex Angle:** an angle that measures between  $180^\circ - 360^\circ$



2

Lesson

# Learning to Draw Digitally:

Your task is to draw a **segment**, **ray** and an **angle**. Each figure should be properly labeled.

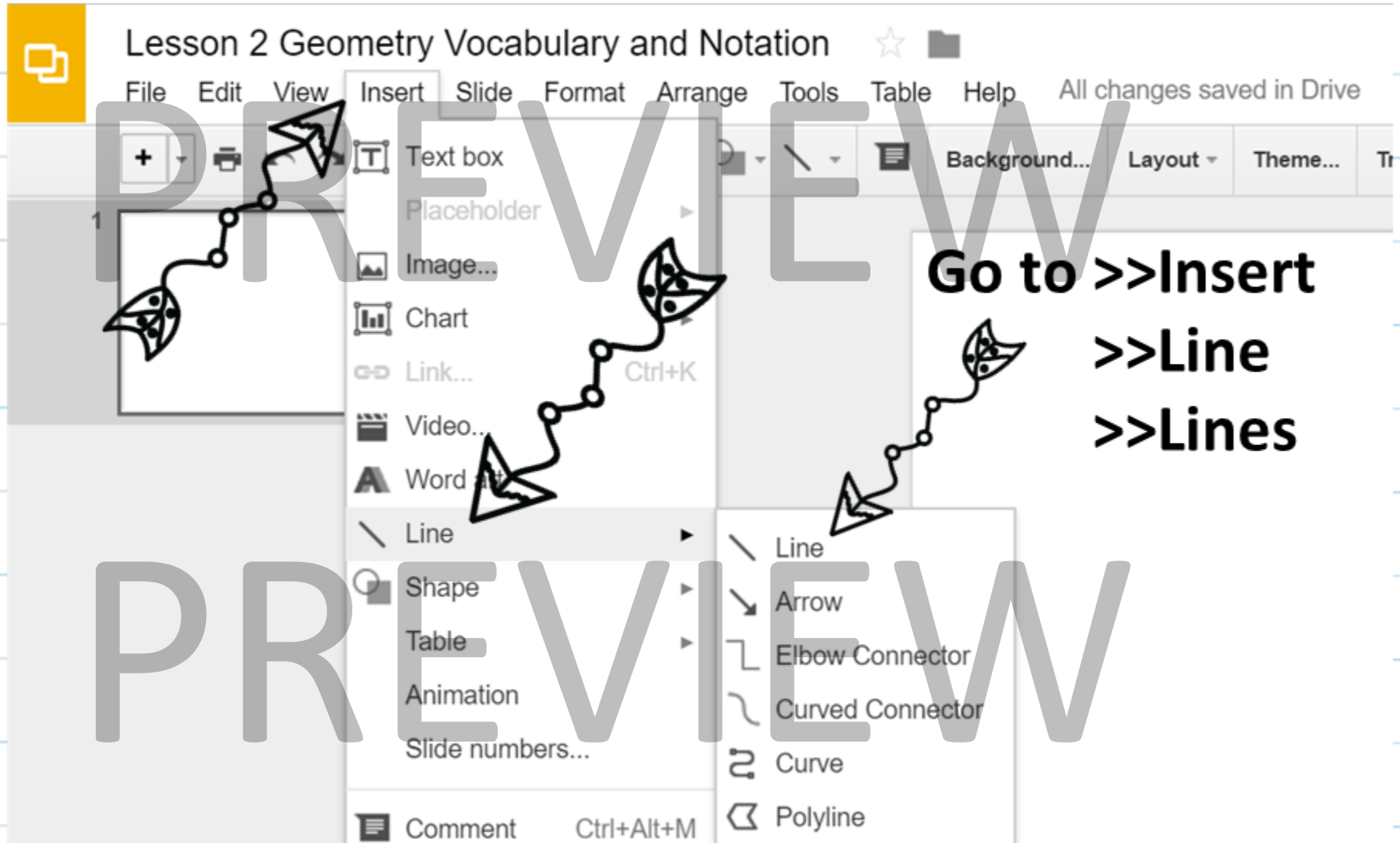
**The following slides provide directions for learning how to draw shapes in Google slides.**

After reading through the directions for each figure, practice **drawing** and **labeling** them.

2

Lesson

# Digital Drawing: Segment



Click on the screen and hold the left button as you move the cursor to where you would like the other end of the segment to be.

# 3

# Lesson

## Using Geometric Tools:

Required Materials:

- Compass
- Straightedge/Ruler
- Paper/Tracing paper
- String
- Mirror

PREVIEW

# Geometric Tools:

**Compass:** geometric tool used to construct circles and arcs



**Straightedge:** geometric tool used to draw segments and lines





# Paper and Pencil Lab: **Straightedge**

Your task is to use a straightedge to draw one or more of the following:

- Triangle
- House
- Railroad tracks
- Honeycomb
- Clapperboard
- Stop sign
- Cube
- Or your own idea!



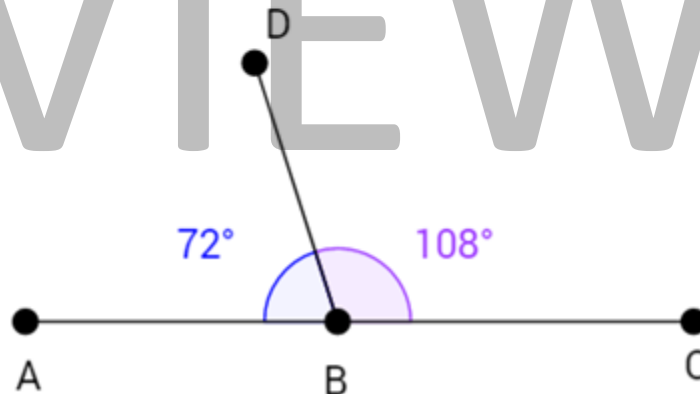
# Linear Pair Exploration

Problem 3: Find the angle measure of 4 different linear pairs.

Go to [this](#) web page.

Click on point D and move it to change the angle. Record 4 different angle measures on the next slide.

## Linear Pair Exploration



Set 1

Set 2

Set 3

Set 4

$\angle ABD = \text{-----}$

$m\angle ABD = \text{-----}$

$m\angle ABD = \text{-----}$

$m\angle ABD = \text{-----}$

$\angle CBD = \text{-----}$

$m\angle CBD = \text{-----}$

$m\angle CBD = \text{-----}$

$m\angle CBD = \text{-----}$

Make 2 or more observations about the angles and their measures.

Turn and talk to a neighbor to share observations. Based on the observations, make a conjecture about the sum of the two angles of a linear pair.

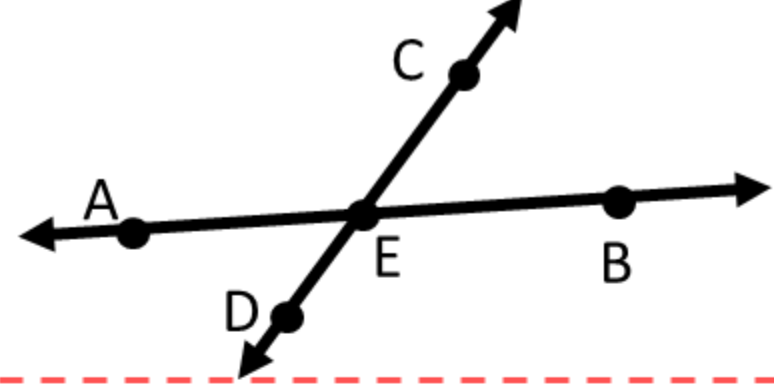
If two angles form a linear pair, then.....

# 4

# Lesson

and  $\angle BEC$  are vertical angles.

The fact that it is \_\_\_\_\_.



Now:  $m\angle AED + m\angle AEC = m\angle DEC$

Now:  $m\angle CEB + m\angle AEC = m\angle AEB$

By the \_\_\_\_\_ Postulate

We know  $m\angle DEC = 180^\circ$

We know  $m\angle AEB = 180^\circ$

By the definition of \_\_\_\_\_

Time to use that awesome brain power again! How can you use the substitution property of equality in the next step?



I'll get you started. Let's focus on what we know from above. Since we know...

$m\angle DEC =$  \_\_\_\_\_ and  $m\angle DEC =$  \_\_\_\_\_ then it follows that...

$m\angle AED + m\angle AEC =$  \_\_\_\_\_ by the \_\_\_\_\_ property of equality.

When solving, you undo what is done to the variable by REVERSING the order of operations.

When you SOLVE an equation you follow the order of operations in REVERSE order:

Parenthesis

Exponents

Multiplication

Division

Addition

Subtraction

Undo Multiplication and Division

Undo Addition and Subtraction

Start by undoing Addition and Subtraction first!

Solve

5

Lesson

# Solving:

Example: Solve for x.

$$(3x+1) - 4 = 12$$

Start by undoing  $-4$  by adding 4 to each side.

It might look like you should undo  $-4$  here, but don't undo what's inside the parenthesis until you've undone everything else.

$$\begin{array}{r} (3x+1) - 4 = 12 \\ + 4 \quad + 4 \\ \hline \end{array}$$

$$3x+1 = 16$$

Next we can undo  $+1$  by adding 1 to each side.

$$\begin{array}{r} 3x+1 = 16 \\ -1 \quad -1 \\ \hline \end{array}$$

$$3x = 15$$

$$32+5=37$$

Finish by dividing each side by 3 to undo multiplying by 3.

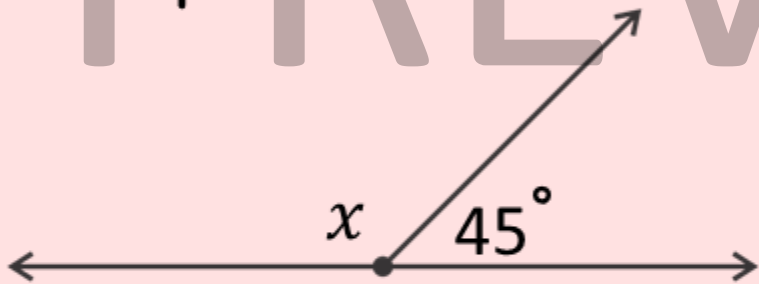
$$\frac{3x}{3} = \frac{15}{3}$$

$$x = 5$$

# Solving: Find the missing angle.

Directions: Solve for the missing angle below. Justify each step of your solution. An example is done for you!

Example:



Justifications

$$\begin{array}{r} x + 45 = 180 \\ -45 \quad -45 \\ \hline \end{array}$$

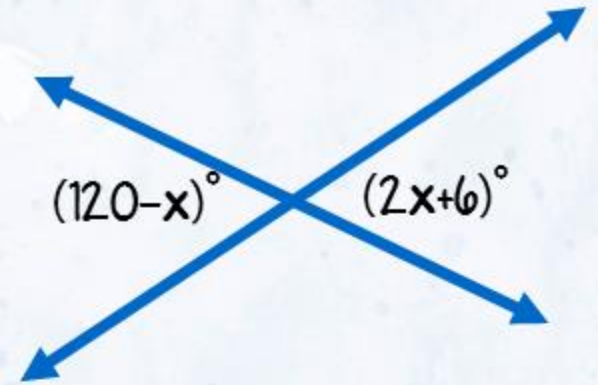
$$x = 135^\circ$$

Linear pairs are supplementary.  
Subtraction Property of Equality

5

Practice

Exercise #2: Fill in the blanks to justify the solution below. Find the missing angle.



1

Steps

Justifications

$$(114-x)^\circ = (2x+6)^\circ$$

$$-6^\circ$$

PREVIEW

$$(114-x)^\circ = (2x)^\circ$$

$$+x \quad +x$$

PREVIEW

$$\frac{114^\circ}{3} = \frac{3x^\circ}{3}$$

PREVIEW

$$38^\circ = x^\circ$$

$$\text{Missing Angle} = (120-38)^\circ$$

$$= 82^\circ$$

PREVIEW



# Digital GEOMETRY Curriculum:

✓ 1) Geometry Vocabulary, Tools & Intro to Proofs

Works In Progress..

2) Constructions

3) Parallel Lines & Equality Proofs

4) Transformations

5) Congruence

6) Similarity

7) Trigonometry and Right Triangles

8) Volume & Surface Area

9) Circles

10) Coordinate Geometry

11) Geometric Probability

**Digital Lessons with Paper & Pencil LABS**

Thank you for your purchase!

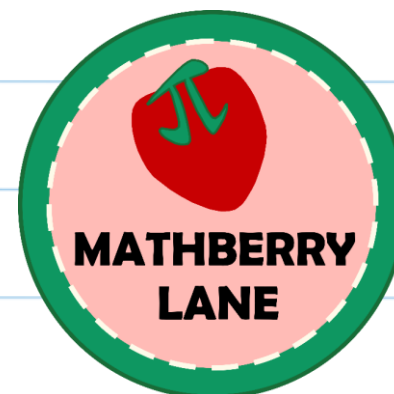
© 2017 Mathberry Lane ALL RIGHTS RESERVED

**Terms of Use:** This product is to be used by the original purchaser only. Copying for more than one teacher, classroom, department, or district is prohibited. The content in this file may not be edited, or used beyond your personal classroom. The graphics in this file are copyrighted and may not be extracted or used for your own personal or commercial projects or given to anyone else. This product may not be distributed or displayed digitally for public view or uploaded to a school or district website (unless password protected), distributed via e-mail, or submitted to file sharing sites such as Amazon Inspire. Failure to comply is a copyright infringement and a violation of the Digital Millennium Copyright Act (DMCA). Intended for single classroom and personal use only. Additional licenses may be purchased for a discount.

Questions, comments, suggestions, and feedback for this product or others are appreciated.

My email address is [admin@mathberrylane.com](mailto:admin@mathberrylane.com)

find me on the web:



Credits for creating this product:



Clipart/Fonts Credits to the following:



“This document was created using licensed graphics from Glitter Meets Glue Designs. It is a violation of copyright law to “lift” the graphics for other purposes. To obtain your own license, visit [glittermeetsglue.com](http://glittermeetsglue.com).”